








June Math Challenge



1st Grade

Have your parents initial after completing the activity for each day.

Sunday	Monday	Tuesday	Wednesday	Thursday	Friday	Saturday
					1 Practice your flash cards for 10 minutes. <input type="checkbox"/>	2 $32 + 20$ <input type="checkbox"/>
3 Imagine Math Facts, iReady Math, or Flash Cards <input type="checkbox"/>	4 $75, 76, 77, \underline{\quad}, \underline{\quad}, \underline{\quad}$ <input type="checkbox"/>	5 Practice your flash cards for 10 minutes. <input type="checkbox"/>	6 Mary has some cards. She gets 7 more from a friend. Now, she has 10. How many cards did she start with? <input type="checkbox"/>	7 Practice your flash cards for 10 minutes. <input type="checkbox"/>	8 Put the numbers in order from least to greatest: 35, 58, 18 <input type="checkbox"/>	9 How many tally marks are there?  <input type="checkbox"/>
10 $18 - \square = 6$ <input type="checkbox"/>	11 Practice your flash cards for 10 minutes. <input type="checkbox"/>	12 There are 7 cats, 4 birds, and 6 dogs at the pet store. How many animals are there? <input type="checkbox"/>	13 Imagine Math Facts, iReady Math, or Flash Cards <input type="checkbox"/>	14 What numbers is the same as 3 ones and 6 tens? <input type="checkbox"/>	15 Practice your flash cards for 10 minutes. <input type="checkbox"/>	16 50 kids are at the park. 20 leave. How many kids are left? <input type="checkbox"/>
17 Complete the Fact Family. $7 + \underline{\quad} = 16$ $\underline{\quad} + \underline{\quad} = \underline{\quad}$ $\underline{\quad} - \underline{\quad} = \underline{\quad}$ $\underline{\quad} - \underline{\quad} = \underline{\quad}$ <input type="checkbox"/>	18 Tom has 8 cars. He got some more as a gift. Now he has 15. How many did he get? <input type="checkbox"/>	19 Practice your flash cards for 10 minutes. <input type="checkbox"/>	20 What time is it?  <input type="checkbox"/>	21 Practice your flash cards for 10 minutes. <input type="checkbox"/>	22 $50, \underline{\quad}, \underline{\quad}, \underline{\quad}, 90, \underline{\quad}$ <input type="checkbox"/>	23 Imagine Math Facts, iReady Math, or Flash Cards <input type="checkbox"/>
24 80 pennies equals $\underline{\quad}$ dimes. <input type="checkbox"/>	25 Practice your flash cards for 10 minutes. <input type="checkbox"/>	26 What is ten less than 82? <input type="checkbox"/>	27 Imagine Math Facts, iReady Math, or Flash Cards <input type="checkbox"/>	28 $\square - 8 = 15$ <input type="checkbox"/>	29 Practice your flash cards for 10 minutes. <input type="checkbox"/>	30 $<, >, \text{ or } =$ $57 \bigcirc 75$ <input type="checkbox"/>

Return your completed calendar to your teacher in August to receive House Points and be entered into a drawing for prizes!








July Math Challenge



1st Grade

Have your parents initial after completing the activity for each day.

Sunday	Monday	Tuesday	Wednesday	Thursday	Friday	Saturday	
1 Imagine Math Facts, iReady Math, or Flash Cards <input type="checkbox"/>	2 Jose had 12 pennies. He found some more in the couch. Now he has 23. How many did he find? <input type="checkbox"/>	3 Practice your flash cards for 10 minutes. <input type="checkbox"/>	4 $\square - 20 = 46$ <input type="checkbox"/>	5 50 pennies equals ____ dimes. <input type="checkbox"/>	6 Practice your flash cards for 10 minutes. <input type="checkbox"/>	7 $68 + 30$ <input type="checkbox"/>	
8 Randy has some Legos. He gets 12 from a friend. Now, he has 32. How many Legos did he start with? <input type="checkbox"/>	9 What numbers is the same as 9 ones and 4 tens? <input type="checkbox"/>	10 Practice your flash cards for 10 minutes. <input type="checkbox"/>	11 32 kids were at the pool. 10 leave. How many kids are left? <input type="checkbox"/>	12 Practice your flash cards for 10 minutes. <input type="checkbox"/>	13 What time is it?  <input type="checkbox"/>	14 Imagine Math Facts, iReady Math, or Flash Cards <input type="checkbox"/>	
15 $73 - 40$ <input type="checkbox"/>	16 Practice your flash cards for 10 minutes. <input type="checkbox"/>	17 $<, >, \text{ or } =$ $98 \bigcirc 89$ <input type="checkbox"/>	18 Play Imagine Math Facts or Flash Cards <input type="checkbox"/>	19 What is ten more than 36? <input type="checkbox"/>	20 Practice your flash cards for 10 minutes. <input type="checkbox"/>	21 Complete the Fact Family. $3 + _____ = 11$ $_____ + _____ = _____$ $_____ - _____ = _____$ $_____ - _____ = _____$ <input type="checkbox"/>	
22 Play Imagine Math Facts or Flash Cards <input type="checkbox"/>	23 How many tally marks are there?  <input type="checkbox"/>	24 Practice your flash cards for 10 minutes. <input type="checkbox"/>	25 Jane has 7 pink, 4 red, and 9 blue erasers. How many does she have? <input type="checkbox"/>	26 Practice your flash cards for 10 minutes. <input type="checkbox"/>	27 $\square + 7 = 14$ <input type="checkbox"/>	28 20, 30 ____, __, ____, ____, <input type="checkbox"/>	
29 What time is it?  <input type="checkbox"/>	30 Practice your flash cards for 10 minutes. <input type="checkbox"/>	31 95, 96 ____, ____, __, ____, <input type="checkbox"/>					

Return your completed calendar to your teacher in August to receive House Points and be entered into a drawing for prizes!