









# June Math Challenge



Have your parents initial after completing the activity for each day.

Sunday	Monday	Tuesday	Wednesday	Thursday	Friday	Saturday
					1 Practice your flash cards for 10 minutes. <input type="checkbox"/>	2 $29 + 57$ <input type="checkbox"/>
3 Imagine Math Facts, iReady Math, or Flash Cards <input type="checkbox"/>	4 What is the value of the tens place in 75? <input type="checkbox"/>	5 Practice your flash cards for 10 minutes. <input type="checkbox"/>	6 Ben has 64 LEGOs. Tom has 62. How many more does Ben have? <input type="checkbox"/>	7 Practice your flash cards for 10 minutes. <input type="checkbox"/>	8 $72 - 19$ <input type="checkbox"/>	9 10, 15, 20, ____, ____, ____, ____ <input type="checkbox"/>
10 What is the difference between 28 and 7? <input type="checkbox"/>	11 Practice your flash cards for 10 minutes. <input type="checkbox"/>	12 What is the value of 4 tens? <input type="checkbox"/>	13 Imagine Math Facts, iReady Math, or Flash Cards <input type="checkbox"/>	14 What is the value?  <input type="checkbox"/>	15 Practice your flash cards for 10 minutes. <input type="checkbox"/>	16 100 less than 583 is equal to: <input type="checkbox"/>
17 Max has 19 red cubes, 24 green cubes, and 27 yellow cubes. How many does he have in all? <input type="checkbox"/>	18 $317 + 294$ <input type="checkbox"/>	19 Practice your flash cards for 10 minutes. <input type="checkbox"/>	20 What time is it?  <input type="checkbox"/>	21 Practice your flash cards for 10 minutes. <input type="checkbox"/>	22 10 more than 836 is equal to: <input type="checkbox"/>	23 Imagine Math Facts, iReady Math, or Flash Cards <input type="checkbox"/>
24 What is the value?  <input type="checkbox"/>	25 Practice your flash cards for 10 minutes. <input type="checkbox"/>	26 34, 36, 38, ____, ____, ____, ____ <input type="checkbox"/>	27 Imagine Math Facts, iReady Math, or Flash Cards <input type="checkbox"/>	28 $633 - 229$ <input type="checkbox"/>	29 Practice your flash cards for 10 minutes. <input type="checkbox"/>	30 What is the difference between 92 and 45? <input type="checkbox"/>







Return your completed calendar to your teacher in August to receive House Points and be entered into a drawing for prizes!



# July Math Challenge



Have your parents initial after completing the activity for each day.

Sunday	Monday	Tuesday	Wednesday	Thursday	Friday	Saturday
1 Imagine Math Facts, iReady Math, or Flash Cards <input type="checkbox"/>	2 $95 - 48$ <input type="checkbox"/>	3 Practice your flash cards for 10 minutes. <input type="checkbox"/>	4 What time is it?  <input type="checkbox"/>	5 $<$ , $>$ , or $=$ $327 \bigcirc 347$ <input type="checkbox"/>	6 Practice your flash cards for 10 minutes. <input type="checkbox"/>	7 Sam read for 38 minutes, 42 minutes, and 50 minutes this week. How long did he read? <input type="checkbox"/>
8 10 more than 194 is equal to: <input type="checkbox"/>	9 Write this number in expanded form: six hundred ninety-five <input type="checkbox"/>	10 Practice your flash cards for 10 minutes. <input type="checkbox"/>	11 526 people visited the aquarium on Monday. 389 people visited on Tuesday. How many more went on Monday? <input type="checkbox"/>	12 Practice your flash cards for 10 minutes. <input type="checkbox"/>	13 $309 + 188$ <input type="checkbox"/>	14 Imagine Math Facts, iReady Math, or Flash Cards <input type="checkbox"/>
15 $147 + 65$ <input type="checkbox"/>	16 Practice your flash cards for 10 minutes. <input type="checkbox"/>	17 800, 700, 600, ____, _____, _____ <input type="checkbox"/>	18 Play Imagine Math Facts or Flash Cards <input type="checkbox"/>	19 What is the value?  <input type="checkbox"/>	20 Practice your flash cards for 10 minutes. <input type="checkbox"/>	21 Write this number in expanded form: four hundred seventy-one <input type="checkbox"/>
22 Play Imagine Math Facts or Flash Cards <input type="checkbox"/>	23 What time is it?  <input type="checkbox"/>	24 Practice your flash cards for 10 minutes. <input type="checkbox"/>	25 $572 - 192$ <input type="checkbox"/>	26 Practice your flash cards for 10 minutes. <input type="checkbox"/>	27 100 more than eight hundred nineteen is equal to: <input type="checkbox"/>	28 $<$ , $>$ , or $=$ $928 \bigcirc 982$ <input type="checkbox"/>
29 What is the value?  <input type="checkbox"/>	30 Practice your flash cards for 10 minutes. <input type="checkbox"/>	31 $73 + 89$ <input type="checkbox"/>				

Return your completed calendar to your teacher in August to receive House Points and be entered into a drawing for prizes!