



# June Math Challenge



Have your parents initial after completing the activity for each day.

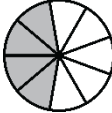



Sunday	Monday	Tuesday	Wednesday	Thursday	Friday	Saturday										
					1 Practice your flash cards for 10 minutes. <input type="checkbox"/>	2 Round these numbers to the nearest 10. 65 _____ 173 _____ <input type="checkbox"/>										
3 Imagine Math Facts, iReady Math, or Flash Cards <input type="checkbox"/>	4 $927 - 572$ <input type="checkbox"/>	5 Practice your flash cards for 10 minutes. <input type="checkbox"/>	6 Mary has 86 stickers. She gets 78 more. How many does she have now? <input type="checkbox"/>	7 Practice your flash cards for 10 minutes. <input type="checkbox"/>	8 Complete the table. <table border="1"> <tr> <td>4</td> <td>4</td> <td>6</td> <td>8</td> <td>10</td> </tr> <tr> <td>8</td> <td>12</td> <td></td> <td>24</td> <td></td> </tr> </table> <input type="checkbox"/>	4	4	6	8	10	8	12		24		9 Joey drove 279 miles to his aunt's house, and 279 back home. How many miles did he drive? <input type="checkbox"/>
4	4	6	8	10												
8	12		24													
10 The Garcia family has \$48 to spend. If there are six people, how much money will each person receive? <input type="checkbox"/>	11 Practice your flash cards for 10 minutes. <input type="checkbox"/>	12 Round these numbers to the nearest 100. 545 _____ 894 _____ <input type="checkbox"/>	13 Imagine Math Facts, iReady Math, or Flash Cards <input type="checkbox"/>	14 What fraction is shaded? <input type="checkbox"/>	15 Practice your flash cards for 10 minutes. <input type="checkbox"/>	16 Nancy is making cupcakes. She put them in at 3:30pm. They bake for 40 minutes. What time will they be done? <input type="checkbox"/>										
17 Round these numbers to the nearest 10. 296 _____ 394 _____ <input type="checkbox"/>	18 Solve $4 \times 9 = \underline{\quad}$ What is the inverse? <input type="checkbox"/>	19 Practice your flash cards for 10 minutes. <input type="checkbox"/>	20 Angel begins reading at 8:00am. He stops at 9:25am. How long did he read? <input type="checkbox"/>	21 Practice your flash cards for 10 minutes. <input type="checkbox"/>	22 <input type="checkbox"/> $\times 4 = 36$ <input type="checkbox"/>	23 Imagine Math Facts, iReady Math, or Flash Cards <input type="checkbox"/>										
24 $518 + 396$ <input type="checkbox"/>	25 Practice your flash cards for 10 minutes. <input type="checkbox"/>	26 What fraction is shaded? <input type="checkbox"/>	27 Imagine Math Facts, iReady Math, or Flash Cards <input type="checkbox"/>	28 Molly has 27 apples. She wants to put them in 3 equal groups. How many apples are in each group? <input type="checkbox"/>	29 Practice your flash cards for 10 minutes. <input type="checkbox"/>	30 Lilly has read 174 books. She reads over the summer. Now she has read 213. How many did she read? <input type="checkbox"/>										

Return your completed calendar to your teacher in August to receive House Points and be entered into a drawing for prizes!

# July Math Challenge

Have your parents initial after completing the activity for each day.



Sunday	Monday	Tuesday	Wednesday	Thursday	Friday	Saturday										
<p>1 Imagine Math Facts, iReady Math, or Flash Cards</p> <p><input type="checkbox"/></p>	<p>2 Round these numbers to the nearest 10. 78 _____ 855 _____</p> <p><input type="checkbox"/></p>	<p>3 Practice your flash cards for 10 minutes.</p> <p><input type="checkbox"/></p>	<p>4 What fraction is shaded?</p>  <p><input type="checkbox"/></p>	<p>5 Andy has 8 boxes of crayons. Each box has 7 crayons. How many does he have in all?</p> <p><input type="checkbox"/></p>	<p>6 Practice your flash cards for 10 minutes.</p> <p><input type="checkbox"/></p>	<p>7 Solve <math>30 \div 3 = \underline{\quad}</math>. What is the inverse?</p> <p><input type="checkbox"/></p>										
<p>8 <math>725 + 189</math></p> <p><input type="checkbox"/></p>	<p>9 Beth went to the park at 10:45. She played for 50 minutes. What time did she leave?</p> <p><input type="checkbox"/></p>	<p>10 Practice your flash cards for 10 minutes.</p> <p><input type="checkbox"/></p>	<p>11 <math>6 \times \square = 42</math></p> <p><input type="checkbox"/></p>	<p>12 Practice your flash cards for 10 minutes.</p> <p><input type="checkbox"/></p>	<p>13 There are 800 books in the library. 372 of them are fiction. How many are not fiction?</p> <p><input type="checkbox"/></p>	<p>14 Imagine Math Facts, iReady Math, or Flash Cards</p> <p><input type="checkbox"/></p>										
<p>15 Complete the table.</p> <table border="1" style="width: 100%; border-collapse: collapse;"> <tr> <td style="width: 20px; text-align: center;">5</td> <td style="width: 20px; text-align: center;">20</td> <td style="width: 20px; text-align: center;">24</td> <td style="width: 20px; text-align: center;">28</td> <td style="width: 20px; text-align: center;">32</td> </tr> <tr> <td style="width: 20px; text-align: center;">8</td> <td style="width: 20px; text-align: center;">5</td> <td style="width: 20px;"></td> <td style="width: 20px;"></td> <td style="width: 20px;"></td> </tr> </table> <p><input type="checkbox"/></p>	5	20	24	28	32	8	5				<p>16 Practice your flash cards for 10 minutes.</p> <p><input type="checkbox"/></p>	<p>17 Round these numbers to the nearest 10. 97 _____ 403 _____</p> <p><input type="checkbox"/></p>	<p>18 Play Imagine Math Facts or Flash Cards</p> <p><input type="checkbox"/></p>	<p>19 Matt has 56 jellybeans. He wants to make 7 equal groups. How many jellybeans will be in each group?</p> <p><input type="checkbox"/></p>	<p>20 Practice your flash cards for 10 minutes.</p> <p><input type="checkbox"/></p>	<p>21 <math>\square \times 5 = 40</math></p> <p><input type="checkbox"/></p>
5	20	24	28	32												
8	5															
<p>22 Play Imagine Math Facts or Flash Cards</p> <p><input type="checkbox"/></p>	<p>23 What fraction is shaded?</p>  <p><input type="checkbox"/></p>	<p>24 Practice your flash cards for 10 minutes.</p> <p><input type="checkbox"/></p>	<p>25 Sam has 9 bags of oranges. There are 6 in each bag. How many oranges does he have?</p> <p><input type="checkbox"/></p>	<p>26 Practice your flash cards for 10 minutes.</p> <p><input type="checkbox"/></p>	<p>27 <math>815 - 409</math></p> <p><input type="checkbox"/></p>	<p>28 Round these numbers to the nearest 100. 819 _____ 462 _____</p> <p><input type="checkbox"/></p>										
<p>29 Kate's swim practice starts at 2:30. It ends at 3:45. How long is practice?</p> <p><input type="checkbox"/></p>	<p>30 Practice your flash cards for 10 minutes.</p> <p><input type="checkbox"/></p>	<p>31 629 people went to the zoo in May. 688 went in June. How many went altogether?</p> <p><input type="checkbox"/></p>														

Return your completed calendar to your teacher in August to receive House Points and be entered into a drawing for prizes!